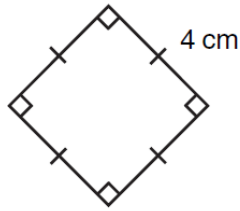
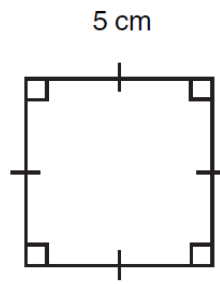


**QUESTION 1** Find the area of the following squares.

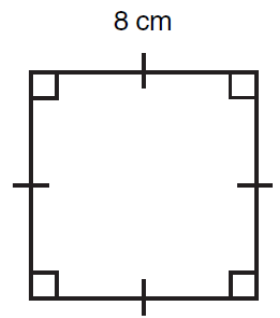
a



b



c



**QUESTION 2** Find the area of the square whose side is given below. (Show all your working.)

a 3 m

b 10 m

c 11 cm

**QUESTION 3** Find the length of the side of the square whose area is given below. (Show all working.)

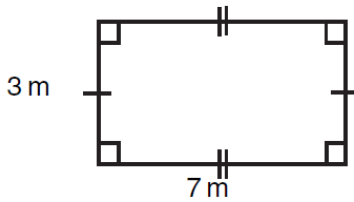
a  $16 \text{ cm}^2$

b  $169 \text{ m}^2$

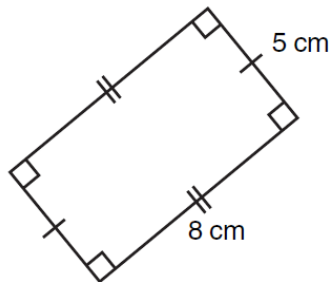
c  $49 \text{ m}^2$

**QUESTION 1** Find the area of the following rectangles.

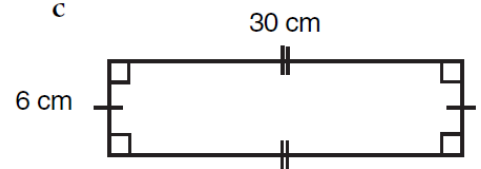
a



b



c



**QUESTION 3** Complete the following.

	Length	Breadth	Area
a	6 m	5 m	
b	8 cm		$32 \text{ cm}^2$
c	18 cm	4 cm	
d	12 cm		$84 \text{ cm}^2$
e	21 m		$105 \text{ m}^2$

	Length	Breadth	Area
f	13 m		$65 \text{ m}^2$
g	14 cm	8 cm	
h		9 cm	$99 \text{ cm}^2$
i	28 mm		$140 \text{ mm}^2$
j		20 cm	$700 \text{ cm}^2$