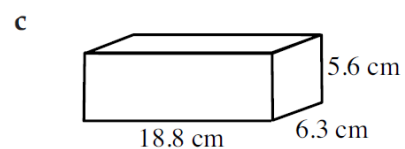
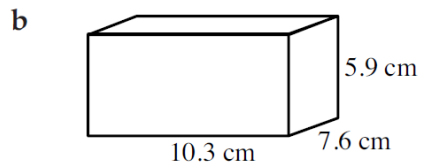
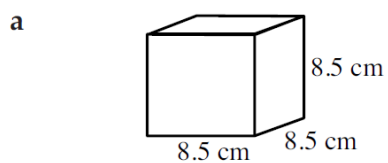
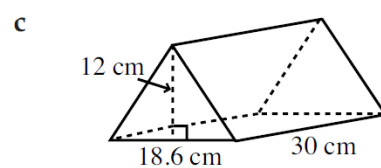
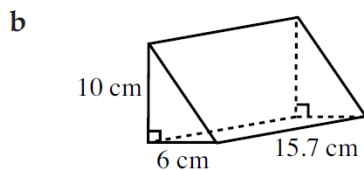
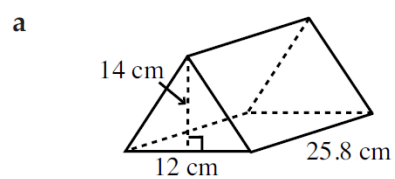


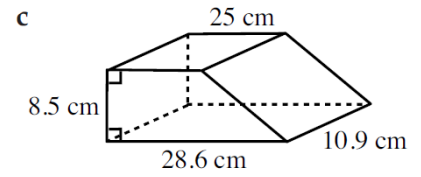
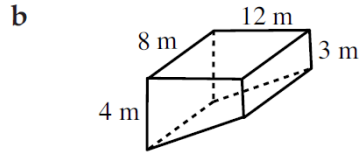
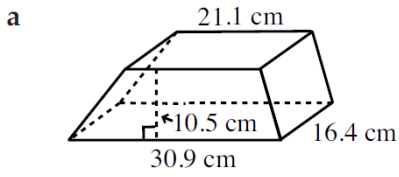
QUESTION 1 Find the volume of the following rectangular prisms (give answer correct to one decimal place).



QUESTION 2 Find the volume of the following triangular prisms (give answer correct to four significant figures).



QUESTION 3 Find the volume of the following trapezoidal prisms (give answer correct to two decimal places).



QUESTION 4 Find the volume of the following solids.

