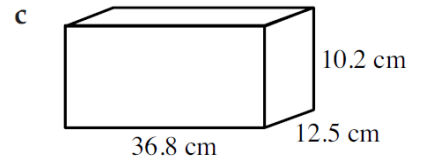
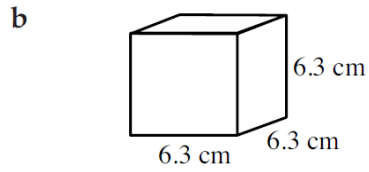
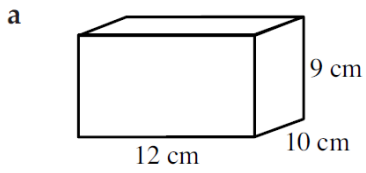
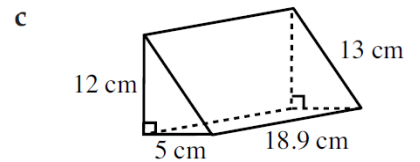
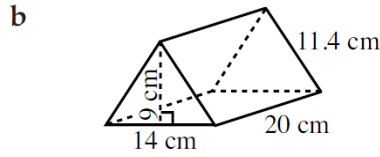
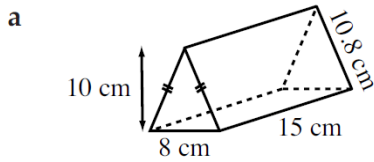


QUESTION 1 Find the surface area of the following rectangular prisms.



QUESTION 2 Find the surface area of the following triangular prisms.



QUESTION 3 Find the surface area of the following trapezoidal prisms.

