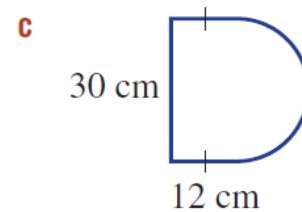
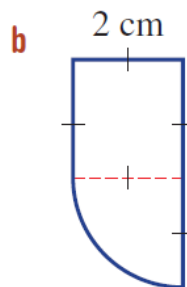
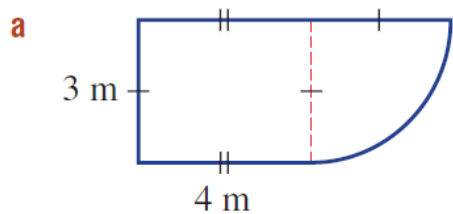


6 Find the perimeter of each of these composite shapes, correct to 1 decimal place.



15 Find the total perimeter of each figure, correct to 1 decimal place. All measurements are in cm.

