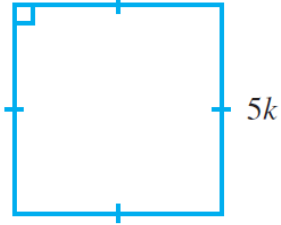


QUESTION 3 Write algebraic expressions to show the sum of the following.

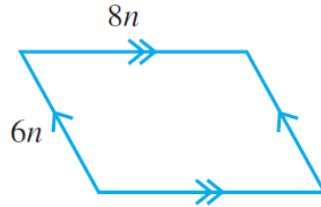
- a** 8 and $a =$ _____ **b** x and $y =$ _____ **c** x, y and $z =$ _____
d $2a, 3b$ and $8c =$ _____ **e** $2l, 8m$ and $3n =$ _____ **f** $5x, 2y$ and $3z =$ _____

8 Find, in simplest form, an algebraic expression for the perimeter of each figure.

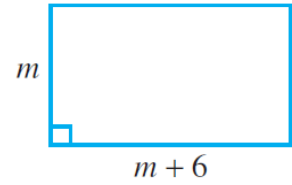
a



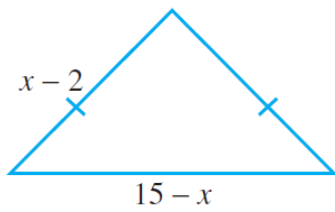
b



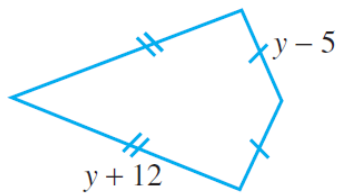
c



d



e



f

