






Name the following.


a  point


b  horizontal line


c  ray

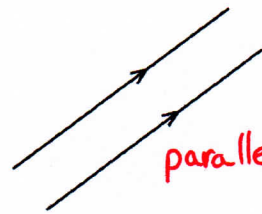
d  segment or interval

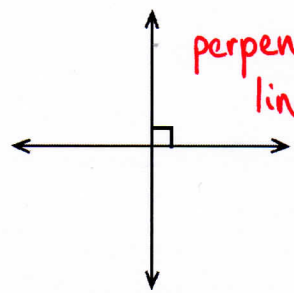
e  curved line


f  sloping line


g  horizontal line

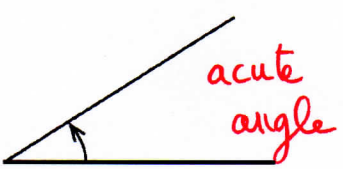
h  vertical line


i  parallel lines

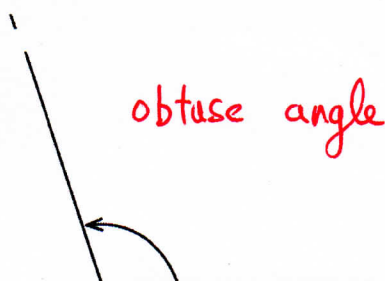
j  perpendicular lines


k  intersecting lines


l  closed curve


m  acute angle

n  right angle

o  obtuse angle

p  straight angle

q  reflex angle

r  revolution

PAGE 1 a point b horizontal line c ray d interval e curved line f sloping line g horizontal line h vertical line
 i parallel lines j perpendicular lines k intersecting lines l closed curve m acute angle n right angle o obtuse angle
 p straight angle q reflex angle r revolution