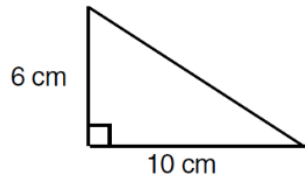
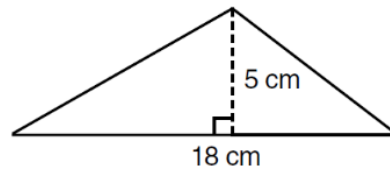


QUESTION 1 Find the area of the following triangles.

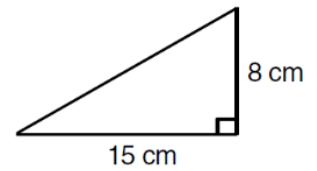
a



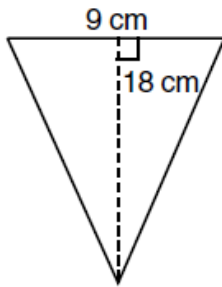
b



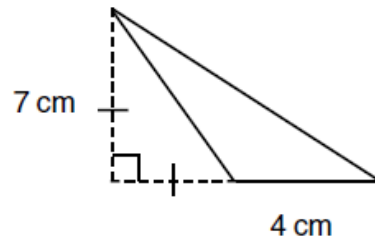
c



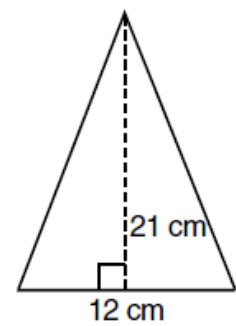
d



e



f



QUESTION 2

a A triangle has a base of 30 cm and a height of 15 cm. What is its area?

b A triangle has an area of 112 cm^2 and a base length of 28 cm. Find its height.

QUESTION 4 Complete the following. (All lengths are in cm; areas are in cm^2 .)

	Base	Height	Area of triangle
a	16	4	
b	9		36
c	14	6	

	Base	Height	Area of triangle
d		11	44
e	20	10	
f		13	65