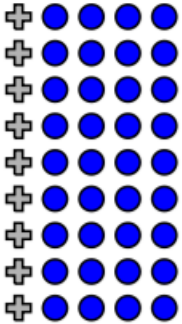



What is the ratio of
 ○ to ◆ ? = ___ : ___ = ___ : ___ Simplified

What is the ratio of
 ◆ to (○ + ◆) ? = ___ : ___ = ___ : ___




What is the ratio of
 ⊕ to ● ? = ___ : ___ = ___ : ___ Simplified

What is the ratio of
 ● to (⊕ + ●) ? = ___ : ___ = ___ : ___



What is the ratio of
 ▲ to ● ? = ___ : ___ = ___ : ___ Simplified

What is the ratio of
 ● to (▲ + ●) ? = ___ : ___ = ___ : ___



What is the ratio of
 △ to ■ ? = ___ : ___ = ___ : ___ Simplified

What is the ratio of
 ■ to (△ + ■) ? = ___ : ___ = ___ : ___

5 Over the past fortnight, it has rained on eight days and it has snowed on three days.

Write down the ratio of:

- a rainy days to snowy days
- b snowy days to total days
- c fine days to rainy and snowy days
- d rainy days to non-rainy days